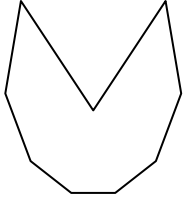




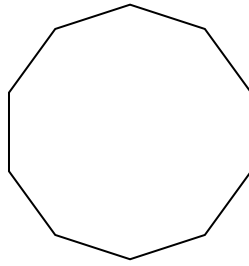
Determine if the shape shown is a regular shape or an irregular shape.

**Answers**

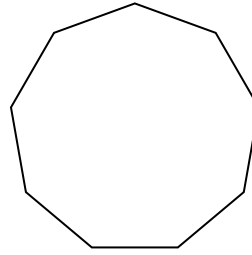
1)



2)



3)




1. \_\_\_\_\_


2. \_\_\_\_\_

3. \_\_\_\_\_

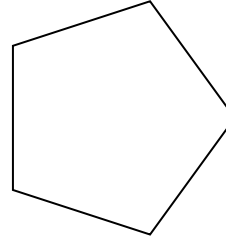
4)



5)



6)



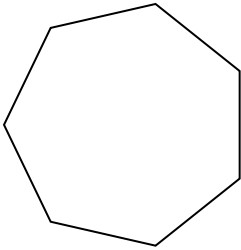
4. \_\_\_\_\_

5. \_\_\_\_\_

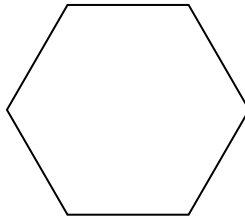
6. \_\_\_\_\_

7. \_\_\_\_\_

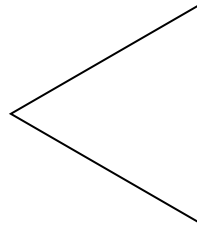
7)



8)



9)



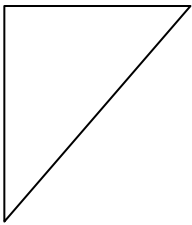
8. \_\_\_\_\_

9. \_\_\_\_\_

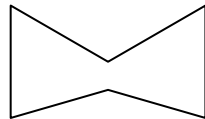
10. \_\_\_\_\_

11. \_\_\_\_\_


10)



11)



12)



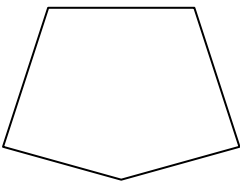
12. \_\_\_\_\_

13. \_\_\_\_\_


14. \_\_\_\_\_

15. \_\_\_\_\_

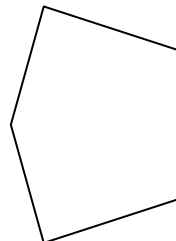
13)



14)



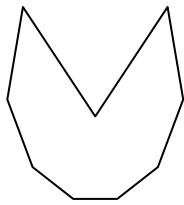
15)



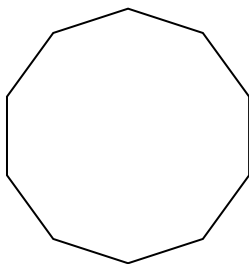


Determine if the shape shown is a regular shape or an irregular shape.

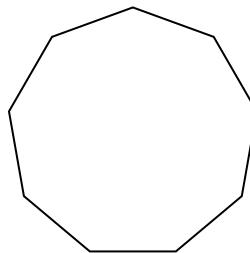
1)



2)




3)



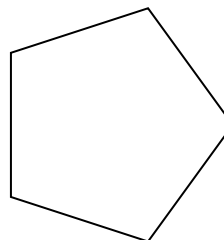
4)



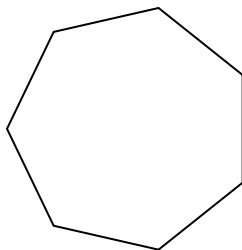
5)



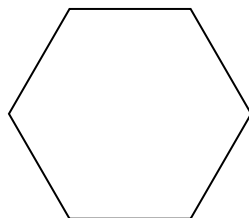
6)



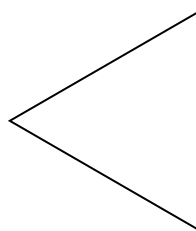
7)



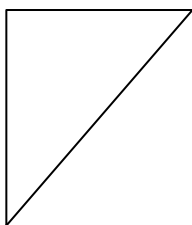
8)



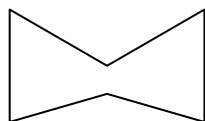
9)




10)



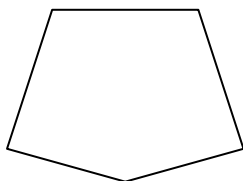
11)




12)




13)



14)



15)

**Answers**1. **Irregular**2. **Regular**3. **Regular**4. **Irregular**5. **Regular**6. **Regular**7. **Regular**8. **Regular**9. **Regular**10. **Irregular**11. **Irregular**12. **Irregular**13. **Irregular**14. **Irregular**15. **Irregular**